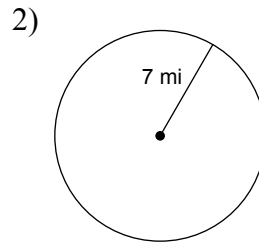
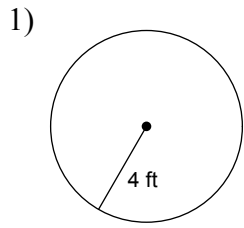
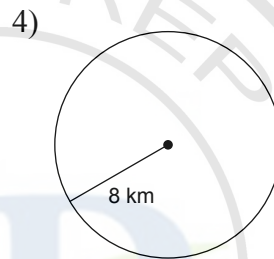
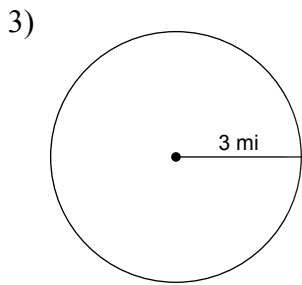


Assignment : Area of Plane

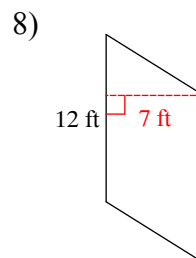
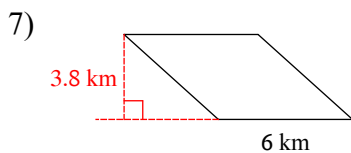
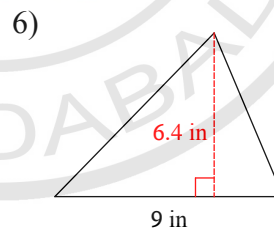
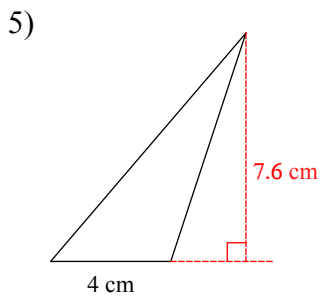
Find the area of each. Use your calculator's value of π . Round your answer to the nearest tenth.

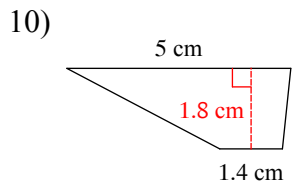
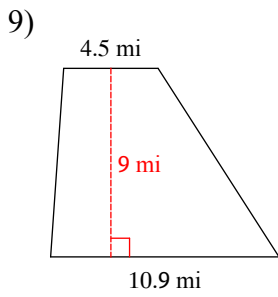


Find the circumference of each circle. Use your calculator's value of π . Round your answer to the nearest tenth.

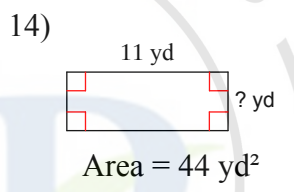
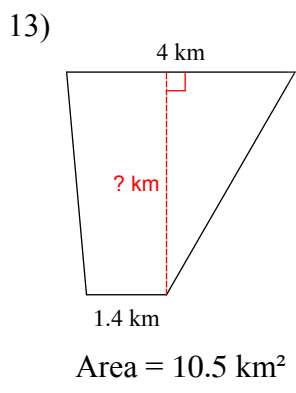
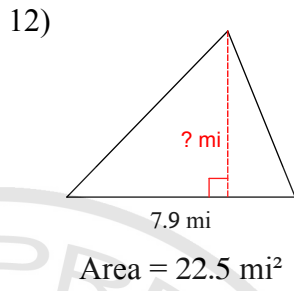
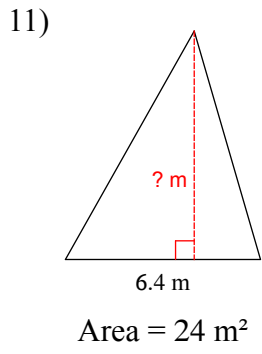


Find the area of each.

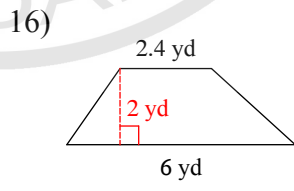
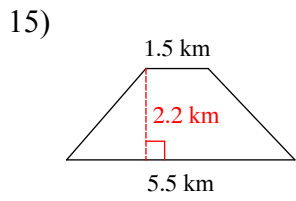




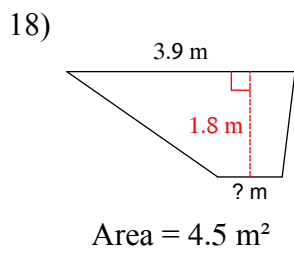
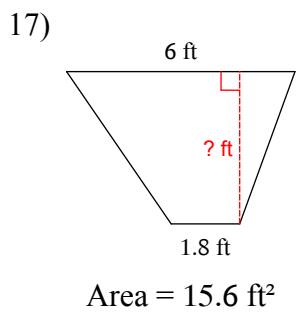
Find the missing measurement. Round your answer to the nearest tenth.



Find the area of each.



Find the missing measurement. Round your answer to the nearest tenth.



Answers to Assignment : Area of Plane

- 1) 50.3 ft²
- 5) 15.2 cm²
- 9) 69.3 mi²
- 13) 3.9 km
- 17) 4 ft

- 2) 153.9 mi²
- 6) 28.8 in²
- 10) 5.76 cm²
- 14) 4 yd
- 18) 1.1 m

- 3) 18.8 mi
- 7) 22.8 km²
- 11) 7.5 m
- 15) 7.7 km²

- 4) 50.3 km
- 8) 84 ft²
- 12) 5.7 mi
- 16) 8.4 yd²

