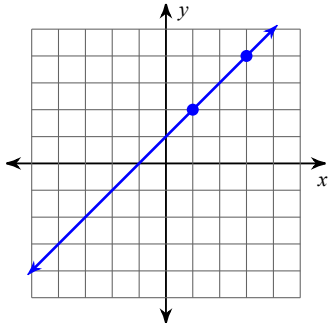


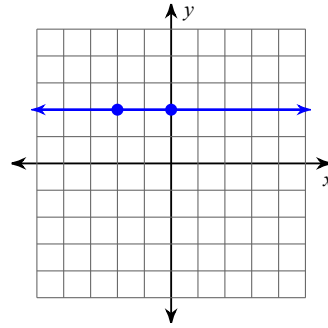
Assignment: Find slope

Find the slope of each line.

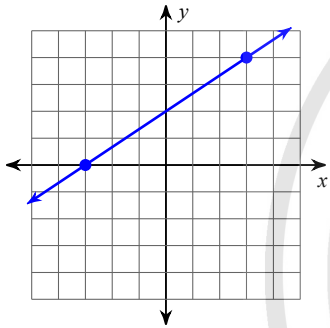
1)



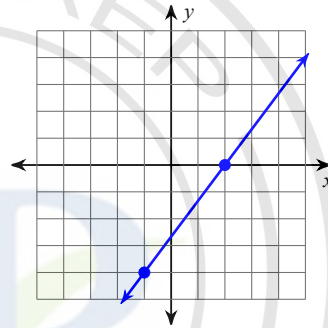
2)



3)



4)



Find the slope of the line through each pair of points.

5)  $(13, 2), (7, -5)$

6)  $(2, -19), (-20, -6)$

7)  $(12, 11), (1, 7)$

8)  $(5, -12), (7, -8)$

Find the slope of each line.

9)  $x + 2y = -6$

10)  $x = 0$

11)  $3x - 2y = -6$

12)  $6x + y = 3$

## Answers to Assignment: Find slope

1) 1

2) 0

3)  $\frac{2}{3}$

4)  $\frac{4}{3}$

5)  $\frac{7}{6}$

6)  $-\frac{13}{22}$

7)  $\frac{4}{11}$

8) 2

9)  $-\frac{1}{2}$

10) Undefined

11)  $\frac{3}{2}$

12) -6

