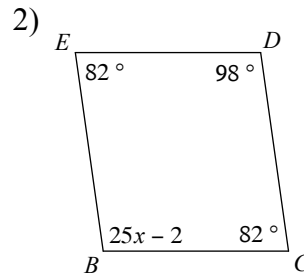
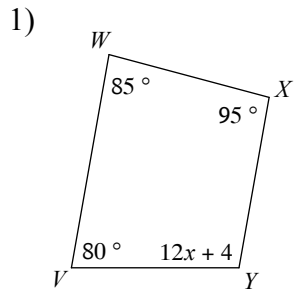


# SATPREP

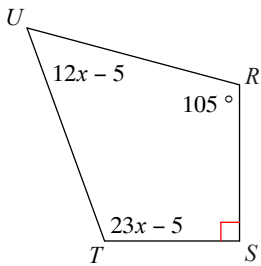
## Assignment : Angle sum of polygoan

Solve for  $x$ .

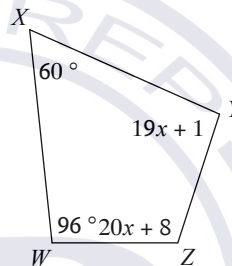


Find the measure of each angle indicated.

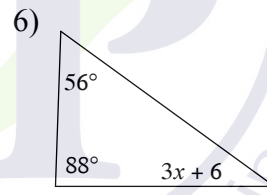
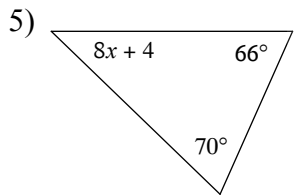
3)  $m\angle U$



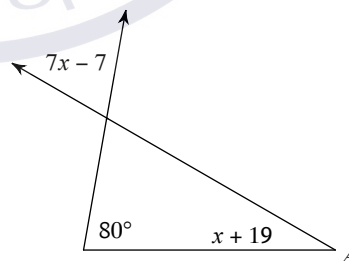
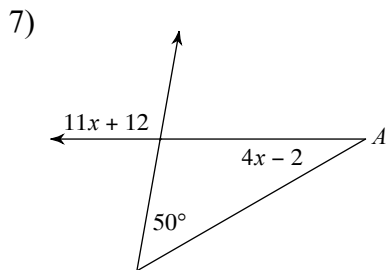
4)  $m\angle Y$



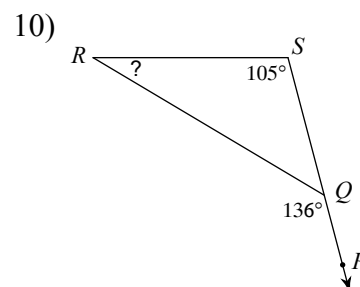
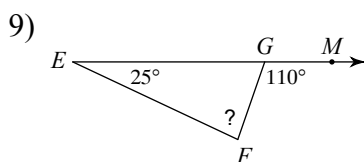
Solve for  $x$ .



Find the measure of angle A.



Find the measure of each angle indicated.



## Answers to Assignment Angle sum of polygoan

- 1) 8
- 5) 5
- 9)  $85^\circ$

- 2) 4
- 6) 10
- 10)  $31^\circ$

- 3)  $55^\circ$
- 7)  $30^\circ$

- 4)  $96^\circ$
- 8)  $30^\circ$

